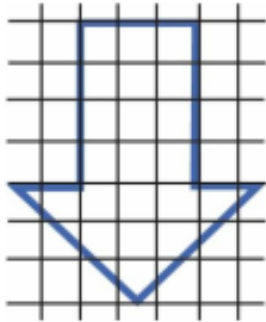


Destination Questions

1 🚩

Estimate the area of the arrow in squares.

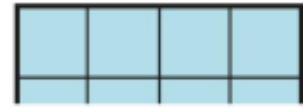


2 🚩

Which is the most accurate estimate for the area covered by a £5 note?

- 80cm²
- 200mm²
- 1m²
- 200cm²

3 🚩

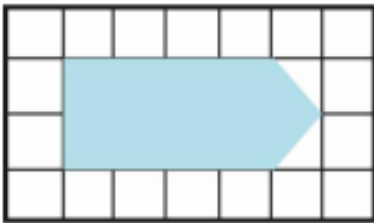


This is part of a rectangle drawn on centimetre-squared paper.

It has an area of 32cm².

How many rows does it have?

4 🚩



This shape has been drawn on cm² paper.

Draw a rectangle with the same area.

Is it possible to draw more than one? Prove it.

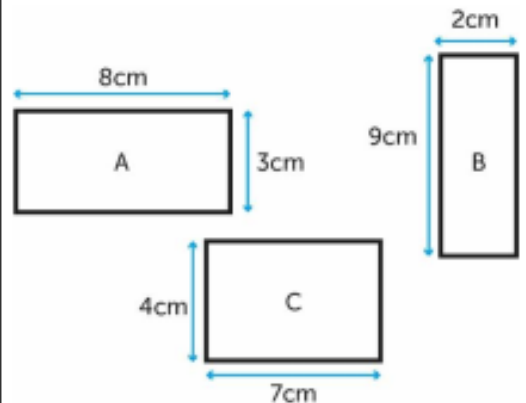
5 🚩

A square has an area of 121cm².

What are its dimensions?

6 🚩

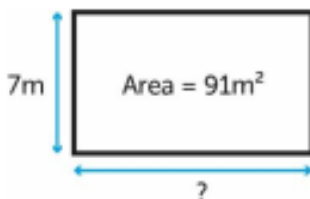
Put these shapes in order from smallest to greatest number of squares which would be covered if they were drawn on cm² paper.



NOT TO SCALE

7 🚩

What is the missing measure? How do you know?

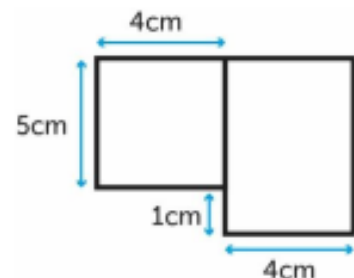


8 🚩

A rectangle has an area of 42cm².

What could be its width and length?

9 🚩



What is the combined area of the rectangles?