

Name:

Class:

Date:

Raw Score (28):


Criteria Score (20):

Level Awarded:

A Place Value:

1. **Eight (8)** dice are rolled.

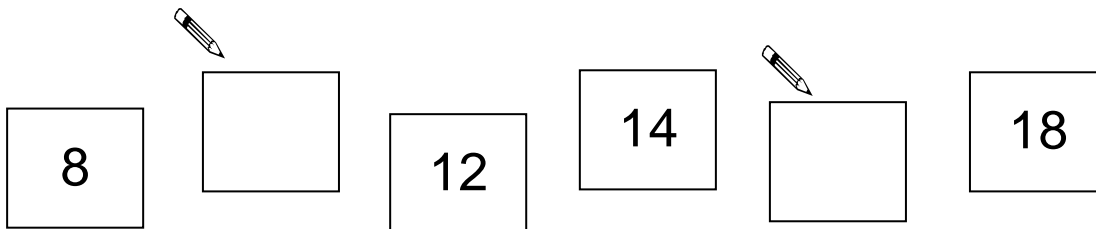
What is the total score?






1 mark (1:1)

2. Fill in the missing numbers.




1 mark (1:2)

3. Write the numbers which are **one less** and **one more** than 30?



one less


30



one more

2 marks (1:3)

4. Rebecca has **six (6)** biscuits.



If Luke has **five (5)** biscuits, who has the **least**?



1 mark (1:4)

5. Fill in the missing parts of the table.
The first one has been done for you.



Number	In Words
5	Five
15	
	Seventeen
20	

2 marks (1:5)

B Add and Subtract

6. Write **+** (add), **-** (subtract) or **=** (equals) to make a correct number sentence.



2

6

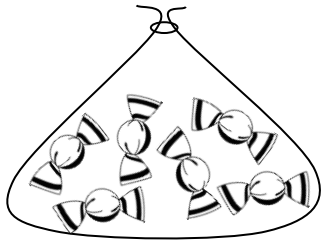
8

1 mark (1:6)

C Multiply and Divide

10. A bag of sweets contains **six (6)** sweets.

How many sweets will you have if you buy **three (3)** bags?

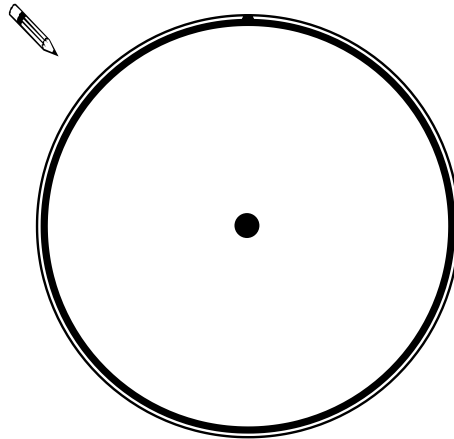




1 mark (1:10)

D Fractions

11. Draw a line to show how this cake can be cut in **half** ($\frac{1}{2}$).



1 mark (1:11)

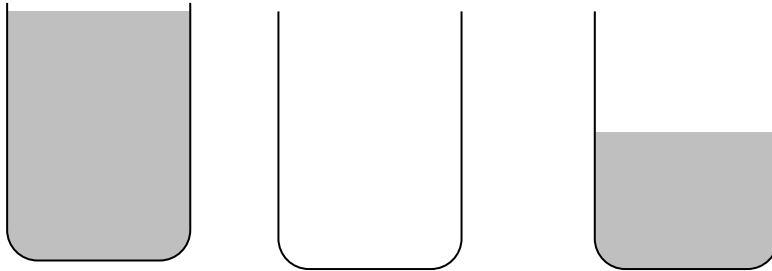
12. Put a circle around one **quarter** ($\frac{1}{4}$) of the candles.



1 mark (1:12)

E Measurement

13a. Tick (✓) the container that is **empty**.




13b. Circle the animal which is **faster** than the dog.



dog



snail



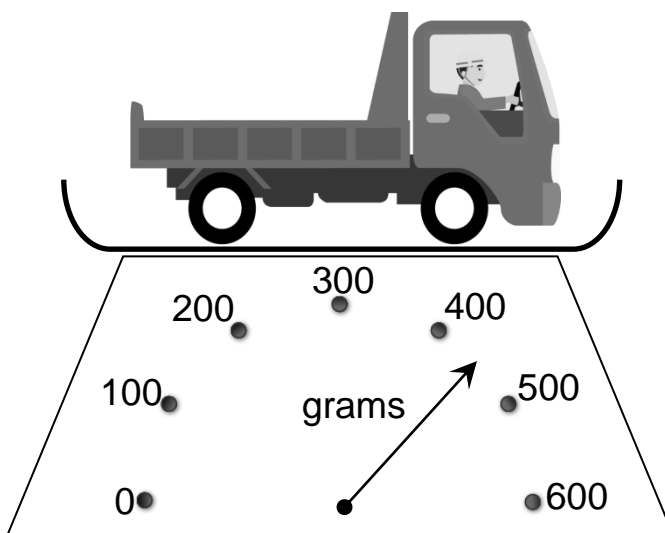
cheetah



2 marks (1:13)

14a. Rory weighed his toy truck using a set of scales.

How **heavy** is his toy truck?

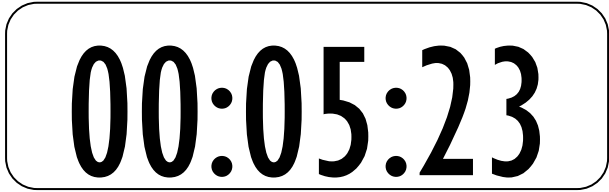


grams

14b. Henry timed how long it took for his kettle to boil.

The time is shown on the stopwatch below.

How many minutes and seconds did it take to boil?



_____ mins _____ seconds

2 marks (1:14)

15. Tick (✓) which note that has a **value** of twenty pounds.



1 mark (1:15)

16. Complete the sentence using one of the words below.

today tomorrow yesterday

If today is Monday,  is/was Tuesday.



1 mark (1:16)

17. Which month comes **before** April?



1 mark (1:17)

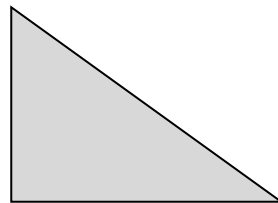

18. Draw hands on each clock face to show the time given.



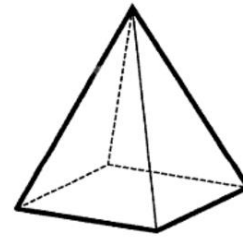

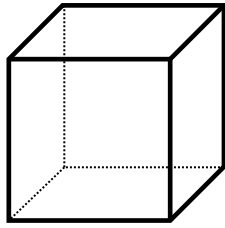
2 marks (1:18)

F Geometry

19a. Draw lines to match each **shape** to its name.



19b. Draw lines to match each shape to its name.



pyramid

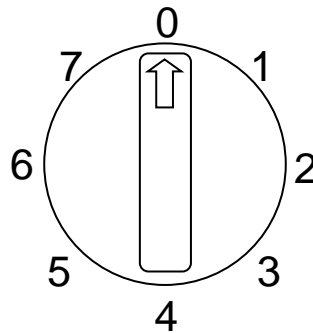
cube

sphere

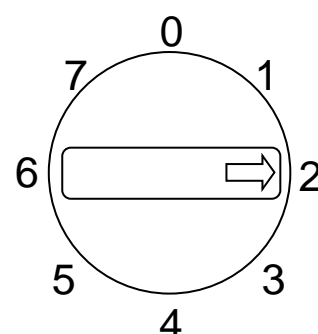
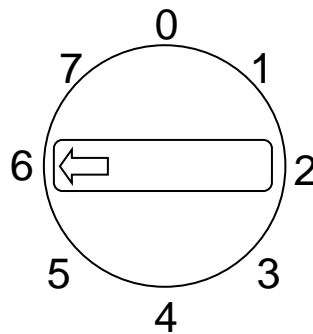
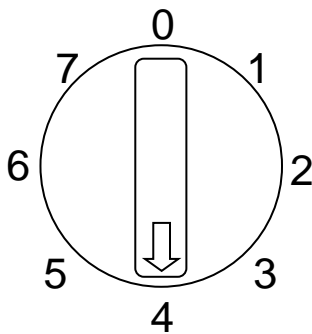


2 marks (1:19)

20. In the diagram below the dial is currently pointing at 0.



Tick (✓) which of the diagrams below show the dial after a **three quarter turn clockwise**.



1 mark (1:20)