


# Year 1 Spring 2 Maths Activity Mat 6


## Section 1

What time is shown?



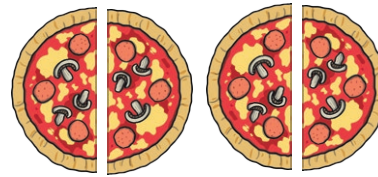
## Section 2

Group the pens into 2s.  
How many groups do you have?




## Section 3

How many halves are there?



## Section 4

Make the lowest number you can with the cards. You can only use each card once.



## Section 5

$$90 - 30 - 20 =$$

## Section 6

What is the underlined digit worth?

27

## Section 7

Which day comes after Wednesday?

## Section 8

Draw a triangle in this box, using a ruler.

# Year 1 Spring 2 Maths Activity Mat 6 Answers

## Section 1

What time is shown?

3 o'clock

## Section 2

Group the pens into 2s.  
How many groups do you have?

4

## Section 3

How many halves are there?

4

## Section 4

Make the lowest number you can with the cards. You can only use each card once.

5 1 8

158

## Section 5

$$90 - 30 - 20 =$$

40

## Section 6

What is the underlined digit worth?

27

20

## Section 7

Which day comes after Wednesday?

Thursday

## Section 8

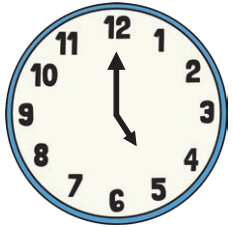
Draw a triangle in this box, using a ruler.

**Triangle drawn.**

# Year 1 Spring 2 Maths Activity Mat 6

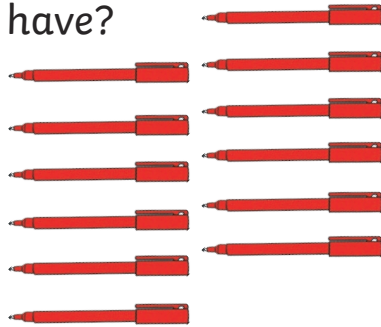
## Section 1

What time is shown?




## Section 2

Group the pens into 2s.  
How many groups do you have?



## Section 3

How many halves are there?



## Section 4

Make the lowest number you can with the cards. You can only use each card once.



## Section 5

$$140 - 40 - 50 =$$

## Section 6

What is the underlined digit worth?

41

## Section 7

What day is two days after Monday?

## Section 8

Draw a triangle with one 2cm side in this box, using a ruler.

# Year 1 Spring 2 Maths Activity Mat 6 Answers

## Section 1

What time is shown?

5 o'clock

## Section 2

Group the pens into 2s.  
How many groups do you have?

6

## Section 3

How many halves are there?

8

## Section 4

Make the lowest number you can with the cards. You can only use each card once.

6 9 5

569

## Section 5

$$140 - 40 - 50 =$$

50

## Section 6

What is the underlined digit worth?

41

40

## Section 7

What day is two days after Monday?

Wednesday

## Section 8


Draw a triangle with one 2cm side in this box, using a ruler.

**Triangle drawn with one side measuring 2cm.**

# Year 1 Spring 2 Maths Activity Mat 6

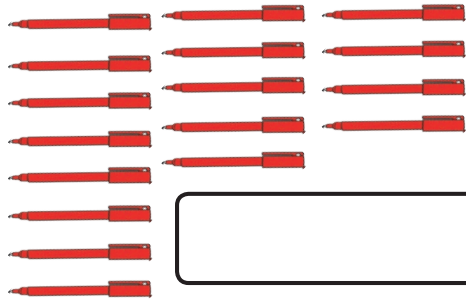
## Section 1

What time is shown?




## Section 2

Group the pens into 2s.  
How many groups do you have?



## Section 3

How many quarters are there?



## Section 4

Make the lowest number you can with the cards. You can only use each card once.



## Section 5

$$230 - 100 - 70 =$$

## Section 6

What is the underlined digit worth?

587

## Section 7

What day is four days after Friday?

## Section 8

Draw a triangle with one side measuring 3cm and one side measuring 2cm in this box, using a ruler.

# Year 1 Spring 2 Maths Activity Mat 6 Answers

## Section 1

What time is shown?

half past 12

## Section 2

Group the pens into 2s.  
How many groups do you have?

8 remainder 1

## Section 3

How many quarters are there?

12

## Section 4

Make the lowest number you can with the cards. You can only use each card once.

2 7 1 8

1278

## Section 5

$$230 - 100 - 70 =$$

60

## Section 6

What is the underlined digit worth?

587

80

## Section 7

What day is four days after Friday?

Tuesday

## Section 8

Draw a triangle with one side measuring 3cm side and one side measuring 2cm in this box, using a ruler.

**Triangle drawn with a side measuring 2cm and a side measuring 3cm.**