


Adding by making 10

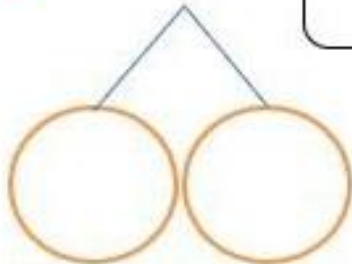


LI: I can add to ten and then add the rest.

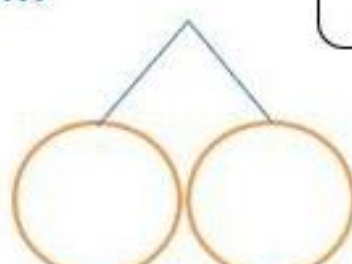
WILF: Use your number bond knowledge.



$$8 + 5 = \square$$




$$7 + 4 = \square$$



$$5 + 7 = \square$$



$$9 + 6 = \square$$



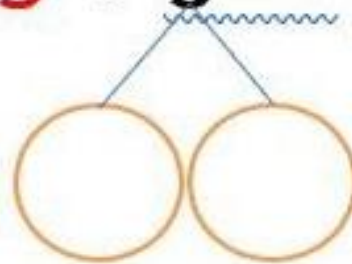
$$9 + 7 = \square$$



$$6 + 5 = \square$$



$$3 + 9 = \square$$



$$9 + 8 = \square$$

