


# Year 1 Maths Activity Mat


3

## Section 1

These bananas come in bunches of 5.  
How many bananas are there in 4 bunches?



## Section 2



$$\square \times 5 = \square$$


## Section 4

I lose 5p.  
How much money have I got left?



## Section 7

What time is it? Circle the correct time.



10 o'clock

Quarter past 10

Quarter to 10

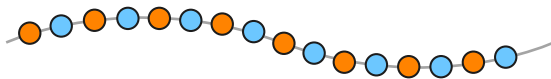
## Section 5

Cut both pizzas into quarters.  
How many quarters altogether?



## Section 3

Count the beads and write the number.



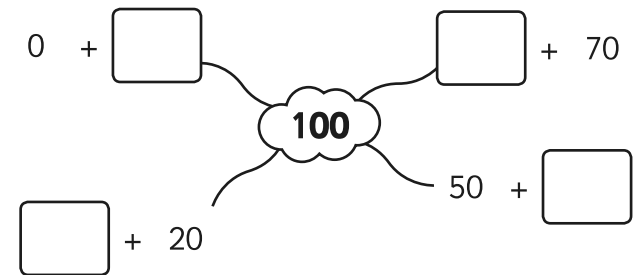
## Section 6

Order these numbers correctly.



## Section 8

Write 4 pairs of numbers that make 100.




# Year 1 Maths Activity Mat: 3

## Answers

### Section 1

These bananas come in bunches of 5.

How many bananas are there in 4 bunches?



20

### Section 4

I lose 5p.


How much money have I got left?



17p

### Section 7

What time is it? Circle the correct time.




10 o'clock

Quarter past 10

Quarter to 10

### Section 2




$$4 \times 5 = 20$$

### Section 5

Cut both pizzas into quarters.

How many quarters altogether?



8

### Section 3

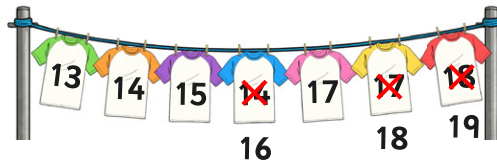
Count the beads and write the number.



16

### Section 6

Order these numbers correctly.



### Section 8

Write 4 pairs of numbers that make 100.

