

Year 1 Maths Activity Mat


4

Section 1

There are 15 cows in a field.

9 cows leave the field.

How many are in the field now?



Section 3

Draw something that would weigh less than this:



Section 4

22 → 10 less →

31 → 10 less →

44 → 10 less →

62 → 10 less →

Section 5

Draw the coins you need to make £1.80.

Section 2

Match up the coins to the amounts.



13p



40p



15p

Section 6

23 people are on the bus.

5 get off.

2 more get on.

How many are on the bus now?



Section 7

Draw a picture to show this: $15 - 6 = 9$

Section 8

14 children go to a party. There are only 10 party hats. How many more hats are needed?



Year 1 Maths Activity Mat: 4


Answers

Section 1

There are 15 cows in a field.

9 cows leave the field.

How many are in the field now?



6

Section 3

Draw something that would weigh less than this:

Accept any reasonable answer.

Section 4

22 → 10 less → 12

31 → 10 less → 21

44 → 10 less → 34

62 → 10 less → 52

Section 5

Draw the coins you need to make £1.80.

Accept any combination of coins totalling £1.80.

Section 6

23 people are on the bus.

5 get off.

2 more get on.

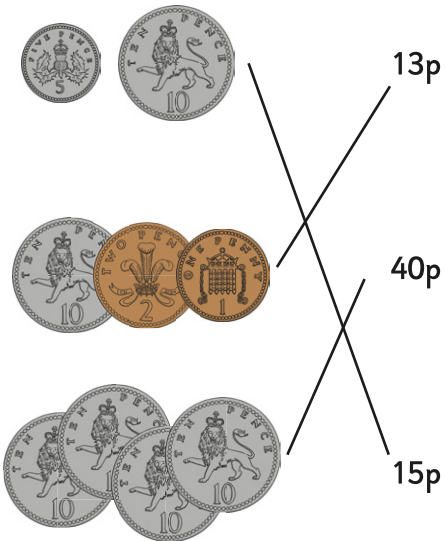
How many are on the bus now?



20

Section 2

Match up the coins to the amounts.



Section 7

Draw a picture to show this: $15 - 6 = 9$

Accept any correct pictorial representation

Section 8

14 children go to a party. There are only 10 party hats. How many more hats are needed?



4